

EXTENSION ACTIVITY  
GENERAL CHEMISTRY

# LECHÂTELIER

## Activity Directions

i

This activity will serve as practice for the topics covered in the LeChâtelier game. This activity is best used in conjunction with not only the tutorial levels, but also supplementary learning resources such as course lectures, textbook reading, etc. Questions labeled “Lock It In” are simply opportunities for you to solidify what you have accomplished in each task and help ensure you meet each objective.

1. Log into Collisions and navigate to the LeChâtelier Game.
2. Play the Tutorial levels, if you haven't done so already.
3. Exit the levels and enter the LeChâtelier sandbox.
4. Follow all instructions as written below. Be sure to reference your course's textbook, lecture notes, etc. as needed.



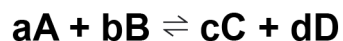
## OBJECTIVE 1

Demonstrate how to calculate the equilibrium constant in terms of concentration ( $K_c$ ) for a reaction and use it to determine if the forward or reverse reaction is favored.

It has long been noticed that reactions often do not go to completion in the way that is predicted by stoichiometric ratios. A mixture of two reactants in an ideal ratio do not necessarily convert entirely to products. We now know that many chemical reactions are actually reversible in that the reaction that converts reactant molecules into products simultaneously occurs in reverse to convert products back into reactants. These reactions can happen at different rates depending on the conditions, but they will eventually reach a state of **dynamic equilibrium** in which the forward and reverse reactions are occurring at the same rate. You should have noticed that the reactions in the LeChâtelier game never stop occurring. Instead, eventually the rate at which you see products appearing is the same as the rate at which you see reactants reappearing.

Try going to the sandbox to see this in action again. You should notice that the rate counters above the reaction chamber are equal. The reaction is at a state of dynamic equilibrium. Now try to use the toggle beneath the chamber to filter your view to look only at the reactants. Then do the same to look only at the products. It should be clear to you that although the rates are equal, the concentrations of reactants and products are typically not. It is very important that you remember this distinction.

The fact that concentrations are not necessarily equal at equilibrium does not mean that there is no means of making sense of equilibrium concentrations. At a given temperature, the concentrations of reactants and products at equilibrium in a reversible reaction will always have the ratio of the product of the equilibrium concentrations of the reactants raised to their stoichiometric coefficients to the equilibrium concentrations of the reactants raised to their stoichiometric coefficients. This ratio is defined as the equilibrium constant ( $K$ ) and the relationship is known as the **law of mass action**. Consider the following reaction at 300 Kelvin:



The value of  $K$  in terms of concentration ( $K_c$ ) for this reaction in the forward direction would be determined by the following expression:

$$K_c = \frac{[C]^c [D]^d}{[A]^a [B]^b}$$

[ ] = Molar Concentration in (Moles/Liter)



## OBJECTIVE 1

Demonstrate how to calculate the equilibrium constant in terms of concentration ( $K_c$ ) for a reaction and use it to determine if the forward or reverse reaction is favored.

The equilibrium constant ( $K$ ) has a few very important characteristics:

1. Its value is specific to the reaction of interest at one particular temperature.
2. Neither concentration nor pressure affect the value of  $K$ .
3. Despite different initial concentrations of reactants and products leading to different final concentrations at equilibrium, the value of  $K_c$  remains unchanged. All final concentrations will be at a ratio equivalent to  $K_c$ .
4. Changes in temperature will change the value of  $K$ .

Since our reaction is reversible, it is important to realize that the  $K$  for the reverse reaction is simply the inverse of the  $K$  for the forward reaction ( $\frac{1}{K}$ ). It is often identified as  $K'$ .

**TASK 1:** Write out the equilibrium constant expression in terms of concentration for each of the homogenous forward reactions ( $K_c$ ) from the sandbox listed in the table below. In the third column, write the equilibrium constant expression for the reverse reaction ( $K_c'$ ). The first one has been done for you.

Reaction	Forward Reaction Equilibrium Constant Expression ( $K_c$ )	Reverse Reaction Equilibrium Constant Expression ( $K_c'$ )
$2 \text{CO (g)} + \text{O}_2 \text{(g)} \rightleftharpoons 2 \text{CO}_2 \text{(g)}$	$K_c = \frac{[\text{CO}_2]^2}{[\text{CO}]^2 [\text{O}_2]}$	
$\text{H}_2 \text{(g)} + \text{Cl}_2 \text{(g)} \rightleftharpoons 2 \text{HCl (g)}$		
$\text{CO (g)} + 3\text{H}_2 \text{(g)} \rightleftharpoons \text{CH}_4 \text{(g)} + \text{H}_2\text{O (g)}$		
$\text{N}_2 \text{(g)} + 3\text{H}_2 \text{(g)} \rightleftharpoons 2\text{NH}_3 \text{(g)}$		



## OBJECTIVE 1

Demonstrate how to calculate the equilibrium constant in terms of concentration ( $K_c$ ) for a reaction and use it to determine if the forward or reverse reaction is favored.

### LOCK IT IN:

What is the relationship between the equilibrium constants for the forward and reverse reactions?




---

---


---

Notice that all of the reactants in products that you saw in Task 1 were in the gaseous state. Since all of the reactants were in the same state of matter, they are said to be **homogeneous reactions**. However, many reactions will not be homogeneous and will occur between substances in different states of matter. Such reactions are classified as **heterogeneous**.



The distinction between these reactions is important because the equilibrium expression of heterogeneous reactions will only include substances in certain states. Since the concentration of pure solids and pure liquids only depend on their density, their concentrations do not change over the course of a heterogeneous reaction. As such, solids ('s' in the chemical equation) and liquids ('l' in the chemical equation) are **NOT** included in the equilibrium expression of a heterogeneous reaction.

**Only substances identified as being in the gaseous ('g' in the chemical equation) or aqueous ('aq' in the chemical equation) states are included.**





## OBJECTIVE 1

Demonstrate how to calculate the equilibrium constant in terms of concentration ( $K_c$ ) for a reaction and use it to determine if the forward or reverse reaction is favored.

**TASK 2:** Write the equilibrium constant expression for each of the heterogeneous forward reactions listed in the table below. In the third column, write the equilibrium constant expression for the reverse reaction. The first two are available to you in the sandbox.

Reaction	Forward Reaction Equilibrium Constant Expression ( $K$ )	Reverse Reaction Equilibrium Constant Expression ( $K'$ )
$\text{AgCl (s)} \rightleftharpoons \text{Ag}^+ \text{(aq)} + \text{Cl}^- \text{(aq)}$	$K_c = [\text{Ag}^+][\text{Cl}^-]$	
$\text{HCl (aq)} + \text{H}_2\text{O (l)} \rightleftharpoons \text{Cl}^- \text{(aq)} + \text{H}_3\text{O}^+ \text{(aq)}$		
$\text{Fe}_3\text{O}_4 \text{(s)} + 4 \text{H}_2 \text{(g)} \rightleftharpoons 3 \text{Fe (s)} + 4 \text{H}_2\text{O (g)}$		
$\text{Cu (s)} + 2 \text{Ag}^+ \text{(aq)} \rightleftharpoons \text{Cu}^{2+} \text{(aq)} + 2 \text{Ag (s)}$		



## OBJECTIVE 1

Demonstrate how to calculate the equilibrium constant in terms of concentration ( $K_c$ ) for a reaction and use it to determine if the forward or reverse reaction is favored.

The equilibrium constant is useful for many reasons, one of which is that it can help us determine how far a reaction will proceed at a particular temperature.

In some reactions, the products are heavily favored. In such a case, there are many more product molecules at equilibrium than reactant molecules. If we consider the structure of an equilibrium expression, a case in which the product molecules are far more abundant than reactant molecules at equilibrium would cause the numerator of the expression to be much larger than the denominator. In this case, the  $K_c$  would be much greater than 1. Since the  $K_c$  of the reverse reaction is simply the inverse of that of the forward reaction, the  $K_c$  of the reverse reaction in such cases would be very small.

In other reactions, the reactants are heavily favored. In these cases, very few of the reactant molecules are converted into product ones. The equilibrium expression in this case would have a much smaller numerator than the denominator. As such,  $K_c$  would be a value much smaller than 1. The opposite would be true of the reverse reaction.

There are many reactions, however, where the equilibrium is defined by similar concentrations of reactants and products. In these cases,  $K_c$  would be a value somewhere around 1.

Overall,  $K_c$  can range from very small numbers in which the forward reaction is relatively unfavorable to extremely large numbers in which the forward reaction is very favorable. Due to the extreme scales to which  $K_c$  can reach, you will often see them presented in scientific notation.

$K_c$	Result
$K_c \gg 1$	Forward reaction progresses very far; reverse reaction does not progress far.
$K_c \approx 1$	Forward and reverse reactions progress to similar degrees.
$K_c \ll 1$	Forward reaction does not progress far; reverse reaction progresses far.


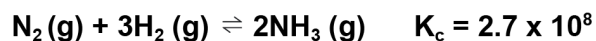
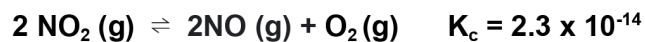





## OBJECTIVE 1

Demonstrate how to calculate the equilibrium constant in terms of concentration ( $K_c$ ) for a reaction and use it to determine if the forward or reverse reaction is favored.

**TASK 3:** The equilibrium constant at 300 K for four of the sandbox reactions are listed below. Rank these reactions where the forward reaction that will proceed the farthest is at the top and the one where the forward reaction will proceed the least at the bottom.



Forward Reaction Proceeds Farthest


Forward Reaction Proceeds Least

### LOCK IT IN:

How would this ranking change for the reverse reactions?




---



---



---



## OBJECTIVE 1

Demonstrate how to calculate the equilibrium constant in terms of concentration ( $K_c$ ) for a reaction and use it to determine if the forward or reverse reaction is favored.

A useful tool when dealing with equilibrium concentrations is called an **ICE** table. The **“I”** stands for **initial** concentration, the **“C”** for **change**, and the **“E”** for **equilibrium** concentration. Let's see how these tables can be used to analyze a scenario.

Consider the following reaction given that initially **[A] = 1.00**, **[B] = 0.5**, and **[C] = 0.0**, but at equilibrium **[A] = 0.6**.



An ICE table can be used to organize the given concentrations and then determine any missing concentrations.

	[A]	[B]	[C]
Initial	1.00	0.5	0.0
Change			
Equilibrium	0.6		

Using our understanding of stoichiometry, we know that any change in [A] will result in half of that change in [B] because of the 2:1 ratio of the coefficients. We also know that the ratio of the coefficients for A and C are 1:1 but opposite in direction—a decrease in [A] will lead to an increase of the same magnitude in [C]. Using this knowledge, we can complete the rest of the table.

	[A]	[B]	[C]
Initial	1.00	0.5	0.0
Change	-0.4	-0.2	+0.4
Equilibrium	0.6	0.3	0.4

Now that we know the equilibrium concentrations, we can calculate the value of  $K_c$ .

$$K_c = \frac{[0.4]^2}{[0.6]^2 [0.3]} = 4.94$$

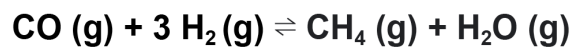





## OBJECTIVE 1

Demonstrate how to calculate the equilibrium constant in terms of concentration ( $K_c$ ) for a reaction and use it to determine if the forward or reverse reaction is favored.


**TASK 4:** The following sandbox reaction occurs at certain temperature:



The reaction mixture initially contains **[CO] = 0.5 M**, **[H<sub>2</sub>] = 1.5 M**, **[CH<sub>4</sub>] = 0.0 M**, and **[H<sub>2</sub>O] = 0.01 M**. At equilibrium **[CO] = 0.01 M**. Determine the equilibrium constant of the reaction using an ICE table to two significant figures in scientific notation. Use the example problem to help you fill in the column labels and complete the problem. Write your final answer in the box beneath the table.



Initial				
Change				
Equilibrium				



$K_c =$



## OBJECTIVE 2

Demonstrate how to use the equilibrium constant in terms of pressure.

$$K_p = K_c(RT)^{\Delta n}$$

**R** = Ideal Gas Constant (0.08206 L atm mol<sup>-1</sup> K<sup>-1</sup>)

**T** = Temperature (K)

**$\Delta n$**  = Change in moles of gas from reactants to products. To determine this, simply sum the coefficients of gaseous reactants and do the same for the products. The change from the reactant sum to the product sum is the  $\Delta n$ . Do not forget the sign!

**TASK 5:** Use the values of  $K_c$  for each sandbox reaction in the table below to calculate  $K_p$  at 300 K.

Reaction	Equilibrium Constant ( $K_c$ )	Calculations	Equilibrium Constant ( $K_p$ )
$N_2(g) + 3H_2(g) \rightleftharpoons 2NH_3(g)$	$2.7 \times 10^8$		
$H_2(g) + Cl_2(g) \rightleftharpoons 2HCl(g)$	$1.6 \times 10^{33}$		
$H_2(g) + I_2(g) \rightleftharpoons 2HI(g)$	$2.9 \times 10^{-1}$		
$2NO(g) + O_2(g) \rightleftharpoons 2NO_2(g)$	$4.2 \times 10^{13}$		

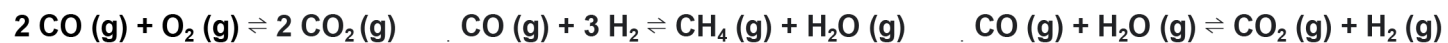



## OBJECTIVE 2

Demonstrate how to use the equilibrium constant in terms of pressure.

### LOCK IT IN:

In which of the following sandbox reactions will  $K_c = K_p$ ?  
Explain your answer.



---

---

---

---



### OBJECTIVE 3

Demonstrate how to use the reaction quotient ( $Q$ ) to determine the progress of a reaction.

When reactants in a reversible reaction are combined, we know that a state of dynamic equilibrium will be reached. However, one question is in which direction the overall reaction will proceed given the initial concentration of the reactants. A useful tool in answering this question is known as the reaction quotient ( $Q$ ). Like the equilibrium constant ( $K$ ), the **reaction quotient** ( $Q$ ) can both apply to concentrations ( $Q_c$ ) and partial pressures ( $Q_p$ ). In fact, the expression for the reaction quotient is identical to that of the equilibrium constant. Here is the reaction quotient expression for  $Q_c$ .

$$Q_c = \frac{[C]^c [D]^d}{[A]^a [B]^b}$$

What is important to remember is that  $K$  represents a ratio that exists at equilibrium. For a reaction at a certain temperature,  $K$  does NOT change. The ratio will be respected at all equilibrium concentrations. However,  $Q$  will constantly be changing until it is equivalent with  $K$ , which indicates that the reaction has reached equilibrium. As a result,  $Q$  is always compared to  $K$  to determine the status of the reaction.

If you think about the structure of the reaction quotient expression, a  $Q$  larger than  $K$  tells us that there is an excess of products (the numerator) compared to the equilibrium concentration of the products. This scenario tells us that the reaction needs to shift towards the reactants to decrease the ratio until it is equivalent to  $K$ . The opposite is true when the  $Q$  is smaller than  $K$ . This scenario tells us that there is an excess of reactants (denominator) compared to the equilibrium concentration of the product. The reaction will shift towards the products until it reaches  $K$  as a result.

$Q$ vs. $K$	Result
$Q > K$	The reaction will progress towards the reactants.
$Q = K$	The reaction is at equilibrium.
$Q < K$	The reaction will progress towards the products.



### OBJECTIVE 3

Demonstrate how to use the reaction quotient ( $Q$ ) to determine the progress of a reaction.

**TASK 6:** Use the sandbox to complete the “disturbance” identified in the table below for the specified reaction. Determine if the disturbance causes the reaction quotient ( $Q_c$ ) to be greater ( $>$ ), equal to ( $=$ ), or less than ( $<$ )  $K_c$  for the reaction.

Reaction	Disturbance	$Q_c >, =, \text{ or } < K_c$
$\text{HCl (aq)} + \text{H}_2\text{O (l)} \rightleftharpoons \text{Cl}^- \text{ (aq)} + \text{H}_3\text{O}^+ \text{ (aq)}$	Increase the concentration of HCl.	$Q_c$ _____ $K_c$
$2 \text{SO}_3 \text{ (g)} \rightleftharpoons 2 \text{SO}_2 \text{ (g)} + \text{O}_2 \text{ (g)}$	Decrease the concentration of $\text{O}_2$ .	$Q_c$ _____ $K_c$
$2 \text{CO (g)} + \text{O}_2 \text{ (g)} \rightleftharpoons 2 \text{CO}_2 \text{ (g)}$	Increase the concentration of $\text{CO}_2$ .	$Q_c$ _____ $K_c$
$\text{H}_2 \text{ (g)} + \text{Cl}_2 \text{ (g)} \rightleftharpoons 2\text{HCl (g)}$	Decrease the pressure.	$Q_c$ _____ $K_c$

#### LOCK IT IN:

Explain how you determined whether  $Q_c$  was greater than, equal to, or less than  $K_c$  immediately after each disturbance.





### OBJECTIVE 3

Demonstrate how to use the reaction quotient ( $Q$ ) to determine the progress of a reaction.

**TASK 7:** Calculate the reaction quotient ( $Q$ ) for each scenario in the table and determine in which direction (left or right) the reaction will progress. Use the "Calculations" column to complete any math.

Reaction	$K_c$ at 300 K	Scenario	Calculations	$Q_c$	Reaction will proceed... (right or left?)
$\text{H}_2(\text{g}) + \text{Cl}_2(\text{g}) \rightleftharpoons 2\text{HCl}(\text{g})$	$1.6 \times 10^{33}$	$[\text{H}_2] = 1.5 \text{ M}$ $[\text{Cl}_2] = 0.5$ $[\text{HCl}] = 2.0 \text{ M}$			
$\text{H}_2(\text{g}) + \text{I}_2(\text{g}) \rightleftharpoons 2\text{HI}(\text{g})$	$2.9 \times 10^{-1}$	$[\text{H}_2] = 0.02 \text{ M}$ $[\text{I}_2] = 0.04$ $[\text{HI}] = 1.1 \text{ M}$			
$2\text{NO}(\text{g}) + \text{O}_2(\text{g}) \rightleftharpoons 2\text{NO}_2(\text{g})$	$4.2 \times 10^{13}$	$[\text{NO}] = 1.2 \times 10^{-3} \text{ M}$ $[\text{O}_2] = 0.01$ $[\text{NO}_2] = 10 \text{ M}$			





## OBJECTIVE 4

Demonstrate an understanding of how changes in concentration, pressure, and temperature affect equilibrium according to LeChâtelier's Principle.

The central concept (and namesake) of the LeChâtelier Game is LeChâtelier's Principle named after the French chemist Henry Louis LeChâtelier. LeChâtelier realized that when a system is at equilibrium, it will respond to changes in concentration, temperature, and pressure to establish a new equilibrium in a way that works to counteract the change that occurred. Although you can find more detail in your textbook or lecture notes, the way reactions at equilibrium change in response to concentration, pressure, and temperature is summarized in the table:


Disturbance	Effect	Example	Reaction will shift towards...
Concentration	An increase in concentration shifts a reaction towards the side that would counter that change.	The concentration of a product is increased.	reactants.
		The concentration of a reactant is increased.	products.
	A decrease in concentration shifts a reaction towards the substance whose concentration has been decreased.	The concentration of a product is decreased.	products.
		The concentration of a reactant is decreased.	reactants.
Partial Pressure	An increase in partial pressures shifts the reaction towards the side with the fewer moles of gas.	The partial pressures of the gases in a reaction are increased in a reaction where the reactant side has more moles of gas.	products.
		The partial pressures of the gases in a reaction are increased in a reaction where the product side has more moles of gas.	reactants.
		The partial pressures of the gases in a reaction are increased in a reaction where both sides have the same number of moles of gas.	neither side.



## OBJECTIVE 4

Demonstrate an understanding of how changes in concentration, pressure, and temperature affect equilibrium according to LeChâtelier's Principle.

Partial Pressure (continued)	A decrease in partial pressures shifts the reaction towards the side with more moles of gas.	The partial pressures of the gases in a reaction are decreased in a reaction where the reactant side has more moles of gas.	reactants.
		The partial pressures of the gases in a reaction are decreased in a reaction where the product side has more moles of gas.	products.
Temperature	An increase in temperature will shift the reaction towards the products in an endothermic reaction and towards the reactants in an exothermic reaction.	The temperature of an endothermic reaction is increased.	products.
		The temperature of an exothermic reaction is increased.	reactants.
	A decrease in temperature will shift the reaction towards the reactants in an endothermic reaction and towards the products in an exothermic reaction.	The temperature of an endothermic reaction is decreased.	reactants.
		The temperature of an exothermic reaction is decreased.	products.





## OBJECTIVE 4

Demonstrate an understanding of how changes in concentration, pressure, and temperature affect equilibrium according to LeChâtelier's Principle.

**TASK 8:** Predict how the concentration disturbance listed for each reaction will affect the equilibrium of the reaction by determining whether the reaction will shift towards the **reactants** or **products**. After making your predictions, test them out using the sandbox.

Reaction	Enthalpy of Reaction/ $\Delta H_{\text{rxn}}$ (kJ/mol)	Concentration Disturbance	Reaction will shift towards... (reactants or products?)	Justification
$\text{N}_2(\text{g}) + 3\text{H}_2(\text{g}) \rightleftharpoons 2\text{NH}_3(\text{g})$	-92	$[\text{NH}_3]$ increases		
$\text{H}_2(\text{g}) + \text{I}_2(\text{g}) \rightleftharpoons 2\text{HI}(\text{g})$	-9.5	$[\text{I}_2]$ decreases		
$2\text{SO}_3(\text{g}) \rightleftharpoons 2\text{SO}_2(\text{g}) + \text{O}_2(\text{g})$	+198	$[\text{SO}_3]$ increases		

### LOCK IT IN:

Explain why the pressure of the first reaction increased when you increased the concentration of ammonia ( $\text{NH}_3$ ).



---

---

---



## OBJECTIVE 4

Demonstrate an understanding of how changes in concentration, pressure, and temperature affect equilibrium according to LeChâtelier's Principle.

**TASK 9:** Predict how the pressure disturbance listed for each reaction will affect the equilibrium of the reaction by determining whether the reaction will shift towards the **reactants** or **products**. After making your predictions, test them out using the sandbox.

Reaction	Enthalpy of Reaction/ $\Delta H_{\text{rxn}}$ (kJ/mol)	Partial Pressure Disturbance	Reaction will shift towards... (reactants, products, or neither?)	Justification
$\text{CO (g)} + 3\text{H}_2\text{(g)} \rightleftharpoons \text{CH}_4\text{(g)} + \text{H}_2\text{O (g)}$	-206	All partial pressures increase.		
$\text{N}_2\text{(g)} + 3\text{H}_2\text{(g)} \rightleftharpoons 2\text{NH}_3\text{(g)}$	-91	All partial pressures increase.		
$2\text{SO}_3\text{(g)} \rightleftharpoons 2\text{SO}_2\text{(g)} + \text{O}_2\text{(g)}$	+198	All partial pressures decrease.		
$\text{H}_2\text{(g)} + \text{Cl}_2\text{(g)} \rightleftharpoons 2\text{HCl (g)}$	-185	All partial pressures decrease.		



## OBJECTIVE 4

Demonstrate an understanding of how changes in concentration, pressure, and temperature affect equilibrium according to LeChâtelier's Principle.

### LOCK IT IN:

What method does the sandbox use to increase the partial pressures of the reaction? Explain why this works.



---

---

---

### LOCK IT IN:

Under what circumstances does pressure have no effect on the equilibrium of the reaction?



---

---

---

### LOCK IT IN:

Explain why the **temperature** of the first reaction increased when you increased the pressure.



---

---

---



## OBJECTIVE 4

Demonstrate an understanding of how changes in concentration, pressure, and temperature affect equilibrium according to LeChâtelier's Principle.

**TASK 10:** Predict how the temperature disturbance listed for each reaction will affect the equilibrium of the reaction by determining if the value  $K_c$  will **increase, decrease**, or remain **unchanged**. Then determine whether the reaction will shift towards the reactants or products. After making your predictions, test them out using the sandbox.

Reaction	Enthalpy of Reaction/ $\Delta H_{\text{rxn}}$ (kJ/mol)	Temperature Disturbance	Change in $K_c$ (increase, decrease, unchanged?)	Reaction will shift towards... (reactants or products?)	Justification
$2 \text{NO}_2 \rightleftharpoons 2 \text{NO} (\text{g}) + \text{O}_2 (\text{g})$	+114	The temperature of the reaction increases.			
$\text{H}_2 (\text{g}) + \text{Cl}_2 (\text{g}) \rightleftharpoons 2 \text{HCl} (\text{g})$	-185	The temperature of the reaction increases.			
$2 \text{SO}_3 (\text{g}) \rightleftharpoons 2 \text{SO}_2 (\text{g}) + \text{O}_2 (\text{g})$	+198	The temperature of the reaction decreases.			
$\text{CO} (\text{g}) + 3 \text{H}_2 (\text{g}) \rightleftharpoons \text{CH}_4 (\text{g}) + \text{H}_2\text{O} (\text{g})$	-206	The temperature of the reaction decreases.			





## OBJECTIVE 4

Demonstrate an understanding of how changes in concentration, pressure, and temperature affect equilibrium according to LeChâtelier's Principle.

### LOCK IT IN:

Explain why the **pressure** of the first reaction increased when you increased the temperature.



---

---

---

There are two special circumstances that are worth considering in the context of LeChâtelier— inert gases and catalysts. Although both seem as if they could affect the equilibrium of reaction, neither one does.

The addition of an inert gas to a reaction at a constant volume will certainly increase the pressure at which the reaction is occurring. It is important to remember, however, that the overall pressure of the reaction does not affect equilibrium. The partial pressures of each gas, however, do. Addition of a gas that will not be involved in the reaction should not change the equilibrium. The addition of a catalyst works to increase the rate of reaction in both directions. The key, however, is that the catalyst increases the rate of the forward and reverse reactions to the same degree. As a result, equilibrium is unaffected.

**TASK 11:** Predict how the special disturbances (inert gases and catalysts) listed for each reaction will affect the equilibrium of the reaction by determining if the value  $K_c$  will **increase, decrease**, or remain **unchanged**.

Reaction	Enthalpy of Reaction/ $\Delta H_{rxn}$ (kJ/mol)	Disturbance	Change in $K_c$ (increase, decrease, unchanged?)	Reaction will shift towards... (reactants, products, or neither?)	Justification
$H_2(g) + Cl_2(g) \rightleftharpoons 2 HCl(g)$	-185	Helium gas is added to a reaction vessel at a constant volume so that the total pressure triples.			
$N_2(g) + 3H_2(g) \rightleftharpoons 2NH_3(g)$	-91	A catalyst is added to the reaction.			



## CLOSURE

**CLOSURE:** One of the reactions available to you in the sandbox is part of what is certainly one of the most famous processes in chemistry—the Haber-Bosch Process. Due to the strength of the triple bond in the diatomic nitrogen found in the atmosphere, it is a rather inert substance. The Haber-Bosch process, however, is an extremely important industrial reaction that is able to hydrogenate the inert nitrogen to create ammonia.



The ammonia produced in this reaction is primarily used to synthesize the chemical fertilizers that support much of modern agriculture. As such, chemical engineers have developed ways to increase the amount of ammonia that they are able to produce from the reaction. Use what you have learned in this extension activity to write a paragraph or several bullet points explaining the factors that a chemical engineer would want to consider and/or implement in order to maximize production of ammonia.

---

---

---

---

---

---

